

<b>99-00 Individual</b>	<b>1</b>	$\frac{170}{891}$	<b>2</b>	3	<b>3</b>	10	<b>4</b>	35	<b>5</b>	540
	<b>6</b>	190	<b>7</b>	$\frac{1}{3}$	<b>8</b>	428571	<b>9</b>	24	<b>10</b>	0

<b>99-00 Group</b>	<b>1</b>	-3	<b>2</b>	5	<b>3</b>	6	<b>4</b>	10	<b>5</b>	10
	<b>6</b>	60	<b>7</b>	0.93	<b>8</b>	421	<b>9</b>	12	<b>10</b>	0

**Individual Events**

- I1** Let  $x = 0.\dot{1}\dot{7} + 0.0\dot{1}\dot{7} + 0.00\dot{1}\dot{7} + \dots$ , find the value of  $x$ . (Reference: 2009 HI1)

$$0.\dot{1}\dot{7} = \frac{17}{99}; 0.0\dot{1}\dot{7} = \frac{17}{990}; 0.00\dot{1}\dot{7} = \frac{17}{9900}, \dots$$

$$x = \frac{17}{99} + \frac{17}{990} + \frac{17}{9900} + \dots$$

$$= \frac{17}{99} \left( 1 + \frac{1}{10} + \frac{1}{100} + \dots \right) \quad \left( \text{It is an infinite geometric series, } a = \frac{17}{99}, r = \frac{1}{10} \right)$$

$$= \frac{17}{99} \cdot \frac{1}{1 - \frac{1}{10}}$$

$$= \frac{17}{99} \cdot \frac{10}{9} = \frac{170}{891}$$

- I2** Solve the following equation:

$$\frac{1}{x+12} + \frac{1}{(x+1)(x+2)} + \frac{1}{(x+2)(x+3)} + \frac{1}{(x+3)(x+4)} + \dots + \frac{1}{(x+10)(x+11)} + \frac{1}{(x+11)(x+12)} = \frac{1}{4}$$

$$\frac{1}{x+12} + \left( \frac{1}{x+1} - \frac{1}{x+2} \right) + \left( \frac{1}{x+2} - \frac{1}{x+3} \right) + \left( \frac{1}{x+3} - \frac{1}{x+4} \right) + \dots + \left( \frac{1}{x+10} - \frac{1}{x+11} \right) + \left( \frac{1}{x+11} - \frac{1}{x+12} \right) = \frac{1}{4}$$

$$\frac{1}{x+1} = \frac{1}{4}$$

$$\Rightarrow x = 3$$

- I3** Using digits 0, 1, 2, and 5, how many 3-digit numbers can be formed, which are divisible by 5? (If no digit may be repeated.)

Possible numbers are: 105, 120, 125, 150, 205, 210, 215, 250, 510, 520.

Altogether 10 numbers.

- I4** Figure 1 represents a  $4 \times 3$  rectangular spiderweb. If a spider walks along the web from A to C and it always walks either due East or due North. Find the total number of possible paths.

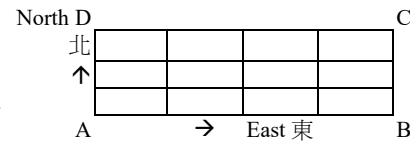
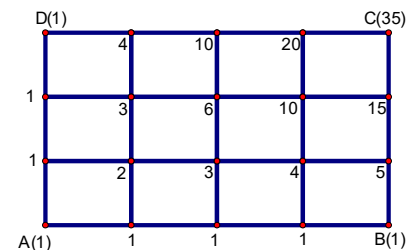


Figure 1 圖一

**Reference: 1983 FI4.1, 1998 HG6, 2007 HG5**

The numbers at each of the vertices of in the following figure show the number of possible ways.

So the total number of ways = 35



- 15** In Figure 2, let  $\angle A + \angle B + \angle C + \angle D + \angle E + \angle F + \angle G = x^\circ$ , find the value of  $x$ .

**Reference: 1992 HI13, 2012 FG3.2**

In the figure, let  $P, Q, R, S, T, U, V$  be as shown.

$$\angle AVP + \angle BPQ + \angle CQR + \angle DRS + \angle EST + \angle FTU + \angle GUV = 360^\circ$$

(sum of ext.  $\angle$  of polygon)

$$\angle A = 180^\circ - (\angle AVP + \angle BPQ) \text{ (}\angle\text{s sum of } \Delta\text{)}$$

$$\angle B = 180^\circ - (\angle BPQ + \angle CQR) \text{ (}\angle\text{s sum of } \Delta\text{)}$$

$$\angle C = 180^\circ - (\angle CQR + \angle DRS) \text{ (}\angle\text{s sum of } \Delta\text{)}$$

$$\angle D = 180^\circ - (\angle DRS + \angle EST) \text{ (}\angle\text{s sum of } \Delta\text{)}$$

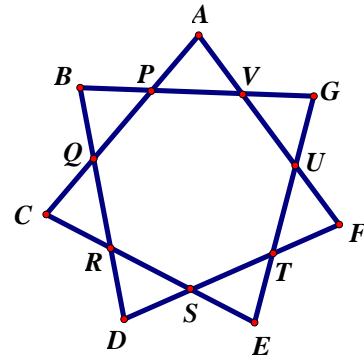
$$\angle E = 180^\circ - (\angle EST + \angle FTU) \text{ (}\angle\text{s sum of } \Delta\text{)}$$

$$\angle F = 180^\circ - (\angle FTU + \angle GUV) \text{ (}\angle\text{s sum of } \Delta\text{)}$$

$$\angle G = 180^\circ - (\angle GUV + \angle AVP) \text{ (}\angle\text{s sum of } \Delta\text{)}$$

$$\angle A + \angle B + \angle C + \angle D + \angle E + \angle F + \angle G = 180^\circ \times 7 - 2 \times 360^\circ$$

$$x = 540$$



- 16** Twenty straight lines were drawn on a white paper. Among them, no two or more straight lines are parallel; also no three or more than three straight lines are concurrent. What is the maximum number of intersections that these 20 lines can form?

2 lines give at most 1 intersection.

3 lines give at most 3 intersections.

4 lines give at most 6 intersections. ( $6 = 1 + 2 + 3$ )

.....  
20 lines give at most  $1 + 2 + 3 + \dots + 19$  intersections  $= \frac{1+19}{2} \cdot 19 = 190$  intersections

- 17** In a family of 2 children, given that one of them is a girl, what is the probability of having another girl? (Assuming equal probabilities of boys and girls.)

Sample space = {(girl, boy), (girl, girl), (boy, girl)} and each outcome is equal probable.

$$\therefore P(\text{another child is also a girl}) = \frac{1}{3}$$

- 18** A particular 6-digit number has a unit-digit "1". Suppose this unit-digit "1" is moved to the place of hundred thousands, while the original ten thousand-digit, thousand-digit, hundred-digit, ... are moved one digit place to the right. The value of the new 6-digit number is one-third of the value of the original 6-digit number. Find the original 6-digit number.

(Reference: 1986 FG8) Let the original number be:  $\overline{abcde1}$ , and the new number be:  $\overline{1abcde}$ .

$$3 \times \overline{1abcde} = \overline{abcde1}$$

$$3(100000 + 10000a + 1000b + 100c + 10d + e) = 100000a + 10000b + 1000c + 100d + 10e + 1$$

Compare the unit digit:  $e = 7$  with carry digit 2 to the tens digit

Compare the tens digit:  $d = 5$  with carry digit 1 to the hundreds digit

Compare the hundreds digit:  $c = 8$  with carry digit 2 to the thousands digit

Compare the thousands digit:  $b = 2$  with no carry digit to the ten-thousands digit

Compare the ten-thousands digit:  $a = 4$  with carry digit 1 to the hundred-thousands digit

The original number is 428571

- 19** Find the value of  $\frac{12 \sin^2 48^\circ + 12 \sin^2 42^\circ}{\sin 330^\circ \tan 135^\circ - \sin^2 48^\circ \sin^2 42^\circ \tan 180^\circ}$ .

$$\frac{12 \sin^2 48^\circ + 12 \sin^2 42^\circ}{\sin 330^\circ \tan 135^\circ - \sin^2 48^\circ \sin^2 42^\circ \tan 180^\circ} = \frac{12 \sin^2 48^\circ + 12 \cos^2 48^\circ}{\left(-\frac{1}{2}\right)(-1) - \sin^2 48^\circ \sin^2 42^\circ \times 0} = \frac{12}{\frac{1}{2}} = 24$$

- 110** Find the shortest distance between the line  $3x - y - 4 = 0$  and the point  $(2, 2)$ .

$$d = \left| \frac{Ax_0 + By_0 + C}{\sqrt{A^2 + B^2}} \right| = \left| \frac{3 \times 2 - 2 - 4}{\sqrt{3^2 + (-1)^2}} \right| = 0$$

**Method 2** Sub.  $(2, 2)$  into  $3x - y - 4 = 0$ , LHS  $= 3 \times 2 - 2 - 4 = 0 = \text{RHS}$

$\therefore (2, 2)$  lies on the line, the shortest distance  $= 0$

## Group Events

- G1** If  $a$  is a root of  $x^2 + 2x + 3 = 0$ , find the value of  $\frac{a^5 + 3a^4 + 3a^3 - a^2}{a^2 + 3}$ .

**Reference: 1993 HI9, 2001 FG2.1, 2007 HG3, 2009 HG2**

Divide  $(a^5 + 3a^4 + 3a^3 - a^2)$  by  $(a^2 + 2a + 3)$ , quotient =  $a^3 + a^2 - 2a$ , remainder =  $6a$

$$\begin{aligned}\frac{a^5 + 3a^4 + 3a^3 - a^2}{a^2 + 3} &= \frac{(a^2 + 2a + 3)(a^3 + a^2 - 2a) + 6a}{(a^2 + 2a + 3) - 2a} \\ &= \frac{6a}{-2a} = -3\end{aligned}$$

- G2** There are exactly  $n$  roots in the equation  $(\cos^2 \theta - 1)(2 \cos^2 \theta - 1) = 0$ , where  $0^\circ < \theta < 360^\circ$ . Find the value of  $n$ .

$$\cos \theta = 1, -1, \frac{1}{\sqrt{2}} \text{ or } -\frac{1}{\sqrt{2}}.$$

$$\theta = 180^\circ, 45^\circ, 315^\circ, 135^\circ, 225^\circ$$

$$n = 5$$

- G3** Find the units digit of  $2004^{2006}$ .

$$4^1 = 4, 4^2 = 16, 4^3 = 64, 4^4 = 256, \dots$$

So the units digit of  $2004^{2006}$  is 6.

- G4** Let  $x = |y - m| + |y - 10| + |y - m - 10|$ , where  $0 < m < 10$  and  $m \leq y \leq 10$ . Find the minimum value of  $x$ .

$$x = y - m + 10 - y + 10 - y + m = 20 - y \geq 20 - 10 = 10$$

The minimum = 10

- G5** There are 5 balls with labels  $A, B, C, D, E$  respectively and there are 5 pockets with labels  $A, B, C, D, E$  respectively. A ball is put into each pocket. Find the number of ways in which exactly 3 balls have labels that match the labels on the pockets.

First choose any 3 bags out of five bags. Put the balls according to their numbers. The remaining 2 balls must be put in the wrong order.

The number of ways is  ${}_5C_3 = 10$ .

- G6** In Figure 1,  $\triangle PQR$  is an equilateral triangle,  $PT = RS$ ;  $PS, QT$  meet at  $M$ ; and  $QN$  is perpendicular to  $PS$  at  $N$ . Let  $\angle QMN = x^\circ$ , find the value of  $x$ .

**Reference: 2019 HI1**

$PT = RS$  (given)

$\angle QPT = 60^\circ = \angle PRS$  ( $\angle$  of an equilateral  $\triangle$ )

$PQ = PR$  (side of an equilateral  $\triangle$ )

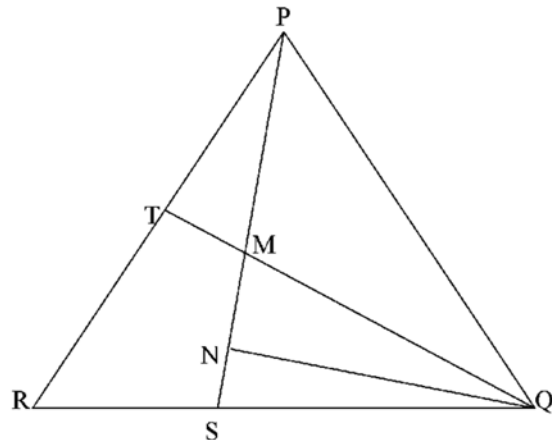
$\triangle PQT \cong \triangle PRS$  (SAS)

$\therefore \angle PTQ = \angle PSR$  (corr.  $\angle$ s  $\cong$   $\triangle$ )

$R, S, M, T$  are concyclic (ext.  $\angle$  = int. opp.  $\angle$ )

$\angle QMN = x^\circ = \angle TRS = 60^\circ$  (ext.  $\angle$ , cyclic quad.)

$x = 60$



- G7** In Figure 2, three equal circles are tangent to each other, and inscribed in rectangle  $PQRS$ , find the value of  $\frac{QR}{SR}$ . (Use  $\sqrt{3} = 1.7$  and give the answer correct to 2 decimal places)

Let the radii of the circles be  $r$ .

Suppose the 3 circles touch the rectangle at  $A$ ,  $B$  and  $C$ . Join  $O_1O_2$ ,  $O_2O_3$ ,  $O_1O_3$ ,  $O_1C$ ,  $O_2A$ ,  $O_3B$  as shown. Then  $O_1O_2 = O_2O_3 = O_1O_3 = 2r$

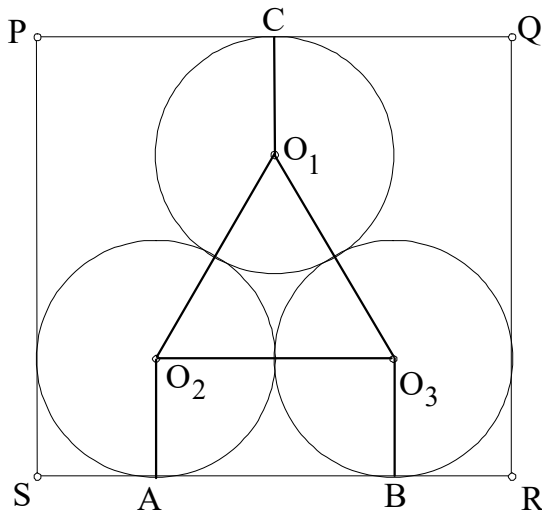
$O_1C = O_2A = O_3B = r$

$O_1O_2O_3$  is an equilateral  $\Delta$

$QR = O_1C + O_1O_2 \sin 60^\circ + O_2A$

$$= r + 2r \cdot \frac{\sqrt{3}}{2} + r = r(2 + \sqrt{3})$$

$$SR = 4r, \quad \frac{QR}{SR} = \frac{r(2 + \sqrt{3})}{4r} = \frac{2 + 1.7}{4} = \frac{37}{40} \approx 0.93$$



- G8** The sum of two positive integers is 29, find the minimum value of the sum of their squares.

Let the two numbers be  $a$  and  $b$ .

$$a^2 + b^2 = a^2 + (29 - a)^2 = 2a^2 - 58a + 841 = 2(a - 14.5)^2 + 420.5$$

$\therefore a$  and  $b$  are integers, the minimum is attained when  $a = 15$ ,  $b = 14$

The minimum value of  $a^2 + b^2 = 15^2 + 14^2 = 225 + 196 = 421$

- G9** Let  $x = \sqrt{3 + \sqrt{3}}$  and  $y = \sqrt{3 - \sqrt{3}}$ , find the value of  $x^2(1 + y^2) + y^2$ .

$$\begin{aligned} x^2(1 + y^2) + y^2 &= (3 + \sqrt{3})(1 + 3 - \sqrt{3}) + 3 - \sqrt{3} \\ &= (3 + \sqrt{3})(4 - \sqrt{3}) + 3 - \sqrt{3} \\ &= 12 + 4\sqrt{3} - 3\sqrt{3} - 3 + 3 - \sqrt{3} = 12 \end{aligned}$$

### Method 2

$$\begin{aligned} x^2(1 + y^2) + y^2 &= (x^2 + 1)(y^2 + 1) - 1 \\ &= (3 + \sqrt{3} + 1)(3 - \sqrt{3} + 1) - 1 \\ &= 16 - 3 - 1 = 12 \end{aligned}$$

- G10** There are nine balls in a pocket, each one having an integer label from 1 to 9. A draws a ball randomly from the pocket and puts it back, then B draws a ball randomly from the same pocket. Let  $n$  be the unit digit of the sum of numbers on the two balls drawn by A and B, and  $P(n)$  be the probability of the occurrence of  $n$ . Find the value of  $n$  such that  $P(n)$  is the maximum.

$$P(1) = P((2,9), (3,8), (4,7), (5,6), (6,5), (7,4), (8,3), (9,2))$$

$$P(2) = P((1,1), (3,9), (4,8), (5,7), (6,6), (7,5), (8,4), (9,3))$$

$$P(3) = P((1,2), (2,1), (4,9), (5,8), (6,7), (7,6), (8,5), (9,4))$$

$$P(4) = P((1,3), (2,2), (3,1), (5,9), (6,8), (7,7), (8,6), (9,5))$$

$$P(5) = P((1,4), (2,3), (3,2), (4,1), (6,9), (7,8), (8,7), (9,6))$$

$$P(6) = P((1,5), (2,4), (3,3), (4,2), (5,1), (7,9), (8,8), (9,7))$$

$$P(7) = P((1,6), (2,5), (3,4), (4,3), (5,2), (6,1), (8,9), (9,8))$$

$$P(8) = P((1,7), (2,6), (3,5), (4,4), (5,3), (6,2), (7,1), (9,9))$$

$$P(9) = P((1,8), (2,7), (3,6), (4,5), (5,4), (6,3), (7,2), (8,1))$$

$$P(0) = P((1,9), (2,8), (3,7), (4,6), (5,5), (6,4), (7,3), (8,2), (9,1))$$

$\therefore$  When  $n = 0$ ,  $P(n)$  is a maximum.