

Hong Kong Mathematics Olympiad (1992 – 93)

Event 1 (Individual)

Unless otherwise stated, all answers should be expressed in numerals in their simplest form.

除非特別聲明，答案須用數字表達，並化至最簡。

- (i) 已知 $7^{2x} = 36$ 及 $7^{-x} = (6)^{\frac{-a}{2}}$ ，求 a 的值。

Given that $7^{2x} = 36$ and $7^{-x} = (6)^{\frac{-a}{2}}$, find the value of a .

$a =$

- (ii) 若 $\log_2\{\log_2[\log_2(2b) + a] + a\} = a$ ，求 b 的值。

Find the value of b if $\log_2\{\log_2[\log_2(2b) + a] + a\} = a$.

$b =$

- (iii) 若方程 $(x - b)(x - 2)(x + 1) = 3(x - b)(x + 1)$ 正根的總數為 c ，求 c 的值。

If c is the total number of positive roots of the equation $(x - b)(x - 2)(x + 1) = 3(x - b)(x + 1)$, find the value of c .

$c =$

- (iv) 若 $\sqrt{3 - 2\sqrt{2}} = \sqrt{c} - \sqrt{d}$ ，求 d 的值。

If $\sqrt{3 - 2\sqrt{2}} = \sqrt{c} - \sqrt{d}$, find the value of d .

$d =$

FOR OFFICIAL USE

Score for
accuracy

×

Mult. factor for
speed

=

Team No.

+

Bonus
score

Time

Total score

Min.

Sec.

Hong Kong Mathematics Olympiad (1992 – 93)

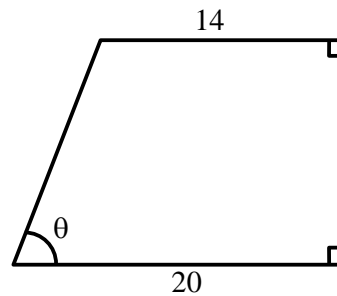
Event 2 (Individual)

Unless otherwise stated, all answers should be expressed in numerals in their simplest form.

除非特別聲明，答案須用數字表達，並化至最簡。

- (i) 若 $\sin \theta = \frac{4}{5}$ ，求四邊形面積 a 。

If $\sin \theta = \frac{4}{5}$, find a , the area of the quadrilateral.



$a =$

- (ii) 若 $b = 126^2 - a^2$ ，求 b 的值。

If $b = 126^2 - a^2$, find the value of b .

$b =$

- (iii) 將 $\$(3000 + b)$ 按 $5 : 6 : 8$ 分成 3 份，最小的一份為 $\$c$ 。求 c 的值。

Dividing $\$(3000 + b)$ in a ratio $5 : 6 : 8$, the smallest part is $\$c$.

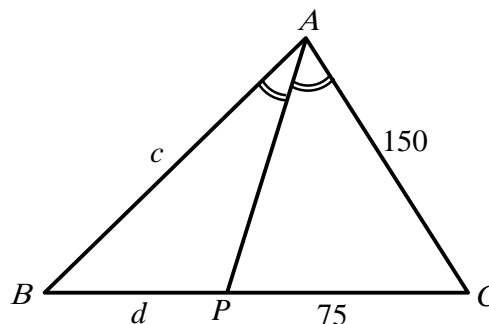
Find the value of c .

$c =$

- (iv) 圖中 AP 等分 $\angle BAC$ 。已知 $AB = c$ ， $BP = d$ ， $PC = 75$ 及 $AC = 150$ ，求 d 的值。

In the figure, AP bisects $\angle BAC$.

Given that $AB = c$, $BP = d$, $PC = 75$ and $AC = 150$, find the value of d .



$d =$

FOR OFFICIAL USE

Score for
accuracy

×

Mult. factor for
speed

=

Team No.

+

Bonus
score

Time

Total score

Min.

Sec.

Hong Kong Mathematics Olympiad (1992 – 93)

Event 3 (Individual)

Unless otherwise stated, all answers should be expressed in numerals in their simplest form.

除非特別聲明，答案須用數字表達，並化至最簡。

- (i) 若 a 為以 13 除 2614303940317 的餘數，求 a 的值。

If a is the remainder when 2614303940317 is divided by 13, find the value of a .

$a =$

- (ii) 設 $P(x, b)$ 為直線 $x + y = 30$ 上的點且滿足 OP 斜率為 a (O 乃原點)。求 b 的值。

Let $P(x, b)$ be a point on the straight line $x + y = 30$ such that slope of $OP = a$ (O is the origin). Determine the value of b .

$b =$

- (iii) 兩人踏單車，起始時相距 $(b + 26)$ km，以時速 40 km/h 及 60 km/h 相向而行。一蒼蠅以時速 100 km/h 往返兩人鼻尖，若牠在兩人碰上前共飛 c km，求 c 的值。

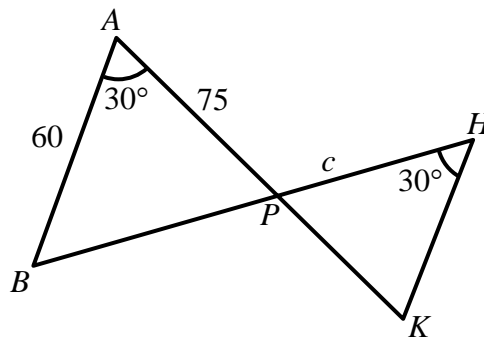
Two cyclists, initially $(b + 26)$ km apart travelling towards each other with speeds 40 km/h and 60 km/h respectively. A fly flies back and forth between their noses at 100 km/h. If the fly flew c km before crushed between the cyclists, find the value of c .

$c =$

- (iv) 圖中 APK 及 BPH 為直線。若 $d = \triangle HPK$ 的面積，求 d 的值。

In the figure, APK and BPH are straight lines.

If $d =$ area of triangle HPK , find the value of d .



$d =$

FOR OFFICIAL USE

Score for
accuracy

×

Mult. factor for
speed

=

Team No.

+

Bonus
score

Time

Total score

Min.

Sec.

Hong Kong Mathematics Olympiad (1992 – 93)

Event 4 (Individual)

Unless otherwise stated, all answers should be expressed in numerals in their simplest form.

除非特別聲明，答案須用數字表達，並化至最簡。

- (i) 已知 x 和 y 、 y 和 z 、 z 和 x 的平均值分別為 5、9、10。

若 x 、 y 、 z 的平均值是 a ，求 a 的值。

Given that the means of x and y , y and z , z and x are respectively 5, 9, 10.

If a is the mean of x , y , z , find the value of a .

$a =$

- (ii) 某兩數的比例為 $5 : a$ 。當每邊加 12 時，兩數的比例變為 $3 : 4$ 。

若 b 為原本兩數之差及 $b > 0$ ，求 b 的值。

The ratio of two numbers is $5 : a$. If 12 is added to each of them, the ratio becomes $3 : 4$.

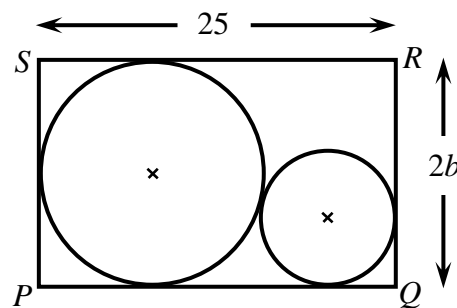
If b is the difference of the original numbers and $b > 0$, find the value of b .

$b =$

- (iii) $PQRS$ 為一長方形，

若細圓的半徑為 c ，求 c 的值。

$PQRS$ is a rectangle. If c is the radius of the smaller circle, find the value of c .



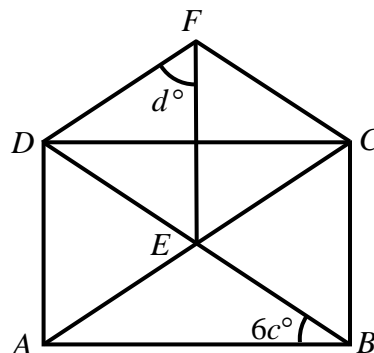
$c =$

- (iv) $ABCD$ 為一長方形及 CEF 為一等邊三角形，

$\angle ABD = 6c^\circ$ ，求 d 的值。

$ABCD$ is a rectangle and CEF is an equilateral triangle,

$\angle ABD = 6c^\circ$, find the value of d .



$d =$

FOR OFFICIAL USE

Score for
accuracy

\times

Mult. factor for
speed

$=$

Team No.

$+$
Bonus
score

Time

Total score

Min.

Sec.

Hong Kong Mathematics Olympiad (1992 – 93)

Event 5 (Individual)

Unless otherwise stated, all answers should be expressed in numerals in their simplest form.

除非特別聲明，答案須用數字表達，並化至最簡。

- (i) 長方形兩對邊同時加長 50%，而其餘兩對邊則縮短 20%。
若長方形的面積增加 $a\%$ ，求 a 的值。
Two opposite sides of a rectangle are increased by 50% while the other two are decreased by 20%. If the area of the rectangle is increased by $a\%$, find the value of a .

$a =$

- (ii) 設 $f(x) = x^3 - 20x^2 + x - a$ 及 $g(x) = x^4 + 3x^2 + 2$ 。若 $h(x)$ 為 $f(x)$ 和 $g(x)$ 的最大公因子，求 $b = h(1)$ 的值。
Let $f(x) = x^3 - 20x^2 + x - a$ and $g(x) = x^4 + 3x^2 + 2$.
If $h(x)$ is the highest common factor of $f(x)$ and $g(x)$, find the value of $b = h(1)$.

$b =$

- (iii) It is known that $b^{16} - 1$ has four distinct prime factors, determine the largest one, denoted by c .
已知 $b^{16} - 1$ 共有四質因子，求其中最大的一個，以 c 表它。

$c =$

- (iv) When c is represented in binary scale, there are d '0's. Find the value of d .
當以二進制表示 c ，則其中有 d 個 '0'。求 d 的值。

$d =$

FOR OFFICIAL USE

Score for
accuracy

×

Mult. factor for
speed

=

Team No.

+

Bonus
score

Time

Total score

Min.

Sec.

Hong Kong Mathematics Olympiad (1992 – 93)

Event 6 (Group)

Unless otherwise stated, all answers should be expressed in numerals in their simplest form.

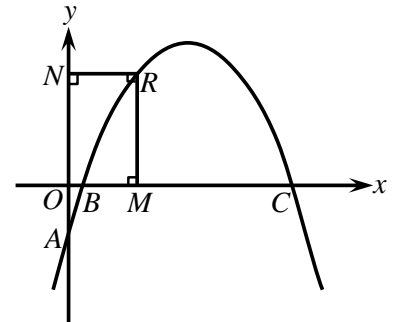
除非特別聲明，答案須用數字表達，並化至最簡。

右圖所示為 $y = px^2 + 5x + p$ 的圖像。 $A = (0, -2)$ 、 $B = \left(\frac{1}{2}, 0\right)$ 、

$C = (2, 0)$ 、 $O = (0, 0)$ 。

The following shows the graph of $y = px^2 + 5x + p$. $A = (0, -2)$,

$B = \left(\frac{1}{2}, 0\right)$, $C = (2, 0)$, $O = (0, 0)$.



(i) 求 p 的值。

Find the value of p .

$p =$

(ii) 若 y 的最大值為 $\frac{9}{m}$ ，求 m 的值。

If $\frac{9}{m}$ is the maximum value of y , find the value of m .

$m =$

(iii) 設 R 為曲線上一點且 $OMRN$ 為一正方形。若 R 的 x 坐標為 r ，求 r 的值。

Let R be a point on the curve such that $OMRN$ is a square.

If r is the x -coordinate of R , find the value of r .

$r =$

(iv) 一斜率為 -2 及通過原點的直線與上述曲線相交於兩點 E 及 F 。若 EF 中點的 y 坐標為 $\frac{7}{s}$ ，求 s 的值。

A straight line with slope $= -2$ passes through the origin cutting the curve at two points E and F .

If $\frac{7}{s}$ is the y -coordinate of the midpoint of EF , find the value of s .

$s =$

FOR OFFICIAL USE

Score for
accuracy

×

Mult. factor for
speed

=

Team No.

+

Bonus
score

Time

Total score

Min.

Sec.

Hong Kong Mathematics Olympiad (1992 – 93)

Event 7 (Group)

Unless otherwise stated, all answers should be expressed in numerals in their simplest form.

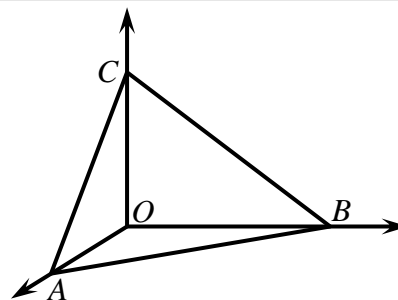
除非特別聲明，答案須用數字表達，並化至最簡。

$OABC$ 為一四面體，其中 OA 、 OB 及 OC 互相垂直。

已知 $OA = OB = OC = 6x$ 。

$OABC$ is a tetrahedron with OA , OB and OC being mutually perpendicular.

Given that $OA = OB = OC = 6x$.



- (i) 若 $OABC$ 的體積為 ax^3 ，求 a 的值。

If the volume of $OABC$ is ax^3 , find the value of a .

$a =$

- (ii) 若 $\triangle ABC$ 的面積為 $b\sqrt{3}x^2$ ，求 b 的值。

If the area of $\triangle ABC$ is $b\sqrt{3}x^2$, find the value of b .

$b =$

- (iii) 若由 O 至 $\triangle ABC$ 的距離為 $c\sqrt{3}x$ ，求 c 的值。

If the distance from O to $\triangle ABC$ is $c\sqrt{3}x$, find the value of c .

$c =$

- (iv) 若由 C 至 AB 中點的俯角為 θ ，且 $\sin \theta = \frac{\sqrt{d}}{3}$ ，求 d 的值。

If θ is the angle of depression from C to the midpoint of AB and $\sin \theta = \frac{\sqrt{d}}{3}$,

find the value of d .

$d =$

FOR OFFICIAL USE

Score for
accuracy

×

Mult. factor for
speed

=

Team No.

+

Bonus
score

Time

Total score

Min.

Sec.

Hong Kong Mathematics Olympiad (1992 – 93)

Event 8 (Group)

Unless otherwise stated, all answers should be expressed in numerals in their simplest form.

除非特別聲明，答案須用數字表達，並化至最簡。

已知方程 $x^2 + (m + 1)x - 2 = 0$ 有兩整數根 $(\alpha + 1)$ 及 $(\beta + 1)$ ，且 $\alpha < \beta$ 及 $m \neq 0$ 。設 $d = \beta - \alpha$ 。

Given that the equation $x^2 + (m + 1)x - 2 = 0$ has 2 integral roots $(\alpha + 1)$ and $(\beta + 1)$ with $\alpha < \beta$ and $m \neq 0$.

Let $d = \beta - \alpha$.

(i) 求 m 的值。

Find the value of m .

$m =$

(ii) 求 d 的值。

Find the value of d .

$d =$

設 n 為由 1 至 2000 內被 3 或 7 除時，餘數都為 1 的整數的總數。

Let n be the total number of integers between 1 and 2000 such that each of them gives a remainder of 1 when it is divided by 3 or 7.

(iii) 求 n 的值。

Find the value of n .

$n =$

(iv) 若 s 為上述 n 個整數的總和，求 s 的值。

If s is the sum of all these n integers, find the value of s .

$s =$

FOR OFFICIAL USE

Score for
accuracy

×

Mult. factor for
speed

=

Team No.

+

Bonus
score

Time

Total score

Min.

Sec.

Hong Kong Mathematics Olympiad (1992 – 93)

Event 9 (Group)

Unless otherwise stated, all answers should be expressed in numerals in their simplest form.

除非特別聲明，答案須用數字表達，並化至最簡。

點 X 、 Y 、 Z 依次將 BC 、 CA 、 AB 分成 $1:2$ 。

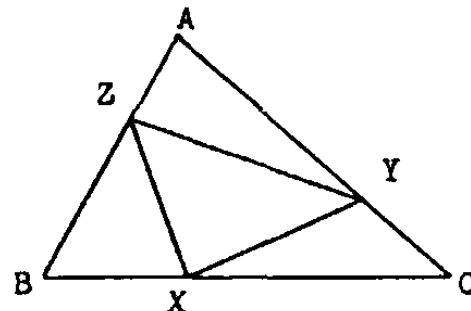
設 $\triangle AZY$ 的面積： $\triangle ABC$ 的面積 $= 2:a$ 及

$\triangle AZY$ 的面積： $\triangle XYZ$ 的面積 $= 2:b$ 。

BC , CA , AB are divided respectively by the points X , Y , Z in the ratio $1:2$.

Let area of $\triangle AZY$: area of $\triangle ABC = 2:a$ and

area of $\triangle AZY$: area of $\triangle XYZ = 2:b$.



(i) 求 a 的值。

Find the value of a .

$a =$

(ii) 求 b 的值。

Find the value of b .

$b =$

擲一枚骰子兩次。設 $\frac{x}{36}$ 為擲得點數總和為 7 或 8 的概率， $\frac{y}{36}$ 為擲得兩數之差為 1 的概率。

A die is thrown 2 times. Let $\frac{x}{36}$ be the probability that the sum of numbers obtained is 7 or 8 and $\frac{y}{36}$ be the probability that the difference of numbers obtained is 1.

(iii) 求 x 的值。

Find the value of x .

$x =$

(iv) 求 y 的值。

Find the value of y .

$y =$

FOR OFFICIAL USE

Score for
accuracy

\times

Mult. factor for
speed

$=$

Team No.

$+$
Bonus
score

Time

Total score

Min.

Sec.

Hong Kong Mathematics Olympiad (1992 – 93)

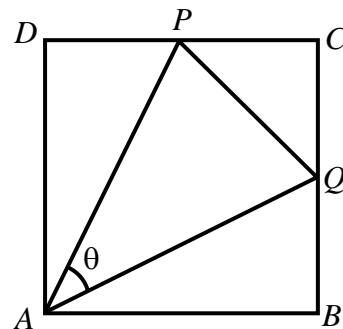
Event 10 (Group)

Unless otherwise stated, all answers should be expressed in numerals in their simplest form.

除非特別聲明，答案須用數字表達，並化至最簡。

$ABCD$ 乃一邊長為 $20\sqrt{5}x$ 的正方形。 P 、 Q 分別為 DC 及 BC 的中點。

$ABCD$ is a square of side length $20\sqrt{5}x$. P , Q are midpoints of DC and BC respectively.



(i) 若 $AP = ax$ ，求 a 的值。

If $AP = ax$, find the value of a .

$a =$

(ii) 若 $PQ = b\sqrt{10}x$ ，求 b 的值。

If $PQ = b\sqrt{10}x$, find the value of b .

$b =$

(iii) 若由 A 至 PQ 的距離為 $c\sqrt{10}x$ ，求 c 的值。

If the distance from A to PQ is $c\sqrt{10}x$, find the value of c .

$c =$

(iv) 若 $\sin \theta = \frac{d}{100}$ ，求 d 的值。

If $\sin \theta = \frac{d}{100}$, find the value of d .

$d =$

FOR OFFICIAL USE

Score for
accuracy

×

Mult. factor for
speed

=

Team No.

+

Bonus
score

Time

Total score

Min.

Sec.