

Hong Kong Mathematics Olympiad 2000-2001
Heat Event (Individual)

除非特別聲明，答案須用數字表達，並化至最簡。

時限：40 分鐘

Unless otherwise stated, all answers should be expressed in numerals in their simplest form.

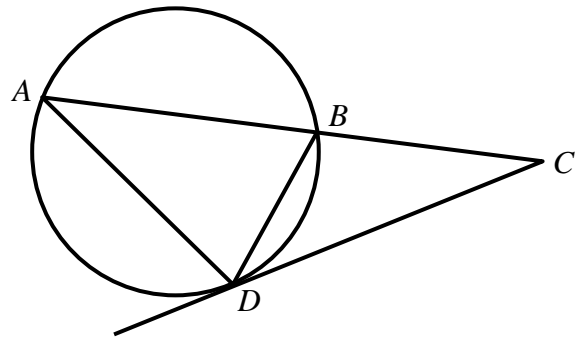
每題正確答案得一分。Each correct answer will be awarded 1 mark. Time allowed: 40 minutes

1. 如果 $4^a = 25^b = 10$ ，求 $\frac{1}{a} + \frac{1}{b}$ 的值。

If $4^a = 25^b = 10$, find the value of $\frac{1}{a} + \frac{1}{b}$.

2. 如圖一， ABC 為一直線， $AB = AD$ ， $\angle BDC = 38^\circ$ ， CD 切圓 ABD 於 D 。設 $\angle BCD = x^\circ$ ，求 x 的值。

In figure 1, ABC is a straight line, $AB = AD$, $\angle BDC = 38^\circ$, CD is a tangent to the circle ABD . Let $\angle BCD = x^\circ$, find the value of x .



圖一 Figure 1

3. 如果 $p = 10x - 4xy - 5x^2 - y^2 - 8$ ，其中 x 和 y 為實數，求 p 的最大值。
If $p = 10x - 4xy - 5x^2 - y^2 - 8$, where x and y are real numbers, find the largest value of p .

4. 如果下列三條直線相交於一點，求 c 的值。

$$L_1: 6x + 6y - 19 = 0$$

$$L_2: 18x + 12y + c = 0$$

$$L_3: 2x + 3y - 8 = 0$$

If the following three straight lines intersect at one point, find the value of c .

$$L_1: 6x + 6y - 19 = 0$$

$$L_2: 18x + 12y + c = 0$$

$$L_3: 2x + 3y - 8 = 0$$

5. 已知 $2 - 6 \cos^2 \theta = 7 \sin \theta \cos \theta$ ，求 $\tan \theta$ 的最大值。

It is known that $2 - 6 \cos^2 \theta = 7 \sin \theta \cos \theta$, find the largest value of $\tan \theta$.

6. 88 張成人車票總值為 $\$ \square 293 \square$ ，由於列印機壞了，五位數字的首尾兩個數字印不出來。
已知每張車票的價值為 $\$P$ ，其中 P 為一整數，求 P 的值。

The total cost for 88 tickets was $\$ \square 293 \square$. Because the printing machine was not functioning well, the first and the last digits of the 5-digit number were missing. If the cost for each ticket is $\$P$, where P is an integer, find the value of P .

7. 如果 p 為方程式 $2x^3 + 7x^2 - 29x - 70 = 0$ 的正實數根，求 p 的值。

If p is the positive real root of $2x^3 + 7x^2 - 29x - 70 = 0$, find the value of p .

8. 甲、乙二人合作做一件工程，30 天便可完工。如果兩人只合作了 6 天，甲便退出，乙須獨自繼續做 40 天才能完工。如果甲每天完成工程的 $\frac{1}{q}$ ，求 q 的數值。

Two persons A, B can complete a task in 30 days when they work together. If they work together for 6 days and then A quits, B needs 40 days more in order to complete the task. If the proportion of the task A can finish each day is $\frac{1}{q}$, find the value of q .

9. 設 a, b, c 為三個相異常數。已知

$$\frac{a^2}{(a-b)(a-c)(a+x)} + \frac{b^2}{(b-c)(b-a)(b+x)} + \frac{c^2}{(c-a)(c-b)(c+x)} \equiv \frac{p+qx+rx^2}{(a+x)(b+x)(c+x)},$$

其中 p, q, r 為常數，且 $s = 7p + 8q + 9r$ ，求 s 的值。

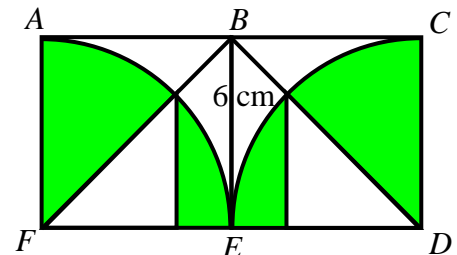
Let a, b, c be three distinct constants. It is given that

$$\frac{a^2}{(a-b)(a-c)(a+x)} + \frac{b^2}{(b-c)(b-a)(b+x)} + \frac{c^2}{(c-a)(c-b)(c+x)} \equiv \frac{p+qx+rx^2}{(a+x)(b+x)(c+x)}$$

where p, q, r are constants, and $s = 7p + 8q + 9r$, find the value of s .

10. 如圖二， $ABEF, BCDE$ 為正方形， $BE = 6 \text{ cm}$ ， \widehat{AE} 及 \widehat{CE} 是分別以 F, D 為圓心畫出來的弧。如果圖中陰影部分的總面積為 $S \text{ cm}^2$ ，求 S 的數值。(取 $\pi = 3$)

In figure 2, $ABEF, BCDE$ are two squares, $BE = 6 \text{ cm}$, and \widehat{AE} and \widehat{CE} are the arcs drawn with centres F and D respectively. If the total area of the shaded parts is $S \text{ cm}^2$, find the value of S . (Assume $\pi = 3$.)



圖二 Figure 2

Hong Kong Mathematics Olympiad 2000-2001

Heat Event (Group)

除非特別聲明，答案須用數字表達，並化至最簡。

時限：20 分鐘

Unless otherwise stated, all answers should be expressed in numerals in their simplest form.

每題正確答案得一分。Each correct answer will be awarded 1 mark. Time allowed: 20 minutes

- 現在鐘面上的時間是一時正。 p 分鐘後，分針與時針剛好重疊，求 p 的最小值。
The time on the clock face is now one o'clock. After p minutes, the minute hand overlaps with the hour hand, find the minimum value of p .
- 把 10 個完全相同的球放入 3 個不同的盒子裏，使得沒有一個盒子是空的，共有多少種放法？
In how many ways can 10 identical balls be distributed into 3 different boxes such that no box is to be empty?

- 設 $x = \sqrt{3-\sqrt{5}} + \sqrt{3+\sqrt{5}}$ 及 $y = x^2$ ，求 y 的值。

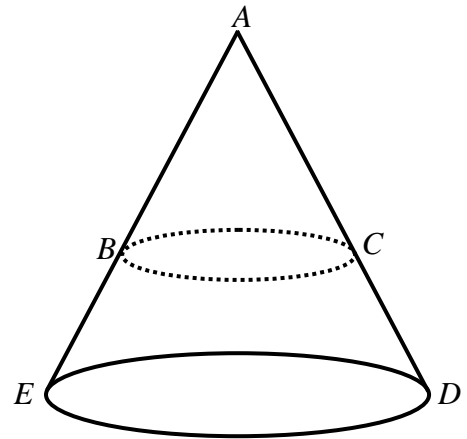
Let $x = \sqrt{3-\sqrt{5}} + \sqrt{3+\sqrt{5}}$ and $y = x^2$, find the value of y .

- 如果 $\frac{4a}{1-x^{16}} \equiv \frac{2}{1-x} + \frac{2}{1+x} + \frac{4}{1+x^2} + \frac{8}{1+x^4} + \frac{16}{1+x^8}$ ，求 a 的值。

If $\frac{4a}{1-x^{16}} \equiv \frac{2}{1-x} + \frac{2}{1+x} + \frac{4}{1+x^2} + \frac{8}{1+x^4} + \frac{16}{1+x^8}$, find the value of a .

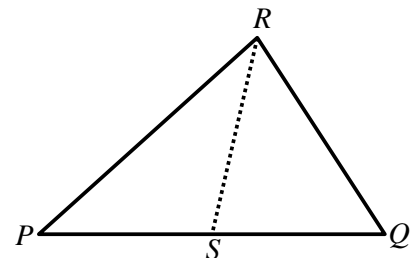
- 如圖一， ADE 是一個直立圓錐體。如果從底部向上並在 $\frac{1}{4}$ 的高度平行底部橫切，上面細錐體 ABC 斜面與餘下底部 $BCDE$ 斜面的面積的比為 $1:k$ ，求 k 的值。

In figure 1, ADE is a right circular cone. Suppose the cone is divided into two parts by a cut running parallel to the base and made $\frac{1}{4}$ of the way up, the ratio of the slant surface of the small cone ABC to that of the truncated base $BCDE$ is $1:k$, find the value of k .



圖一 Figure 1

- 如果十位數 $2468m2468m$ 可被 3 整除，求 m 的最大值。
If a ten-digit number $2468m2468m$ is divisible by 3, find the maximum value of m .
- 求由 x -軸 及直線 $x-3y=0$ 、 $x+y-4=0$ 圍出的面積。
Find the area enclosed by the x -axis and the straight lines $x-3y=0$, $x+y-4=0$.
- 如圖二， PQR 是一個三角形， S 是 PQ 上的中點， $RQ=PS=SQ$ ，且 $\angle RQS=2\angle RPS$ 。設 $\angle PSR=x^\circ$ ，求 x 的值。
In figure 2, PQR is a triangle, S is the mid-point of PQ , $RQ=PS=SQ$, and $\angle RQS=2\angle RPS$. Let $\angle PSR=x^\circ$, find the value of x .



圖二 Figure 2

- 如果 x 滿足方程 $|x-3| + |x-5| = 2$ ，求 x 的最小值。
If x satisfies the equation $|x-3| + |x-5| = 2$, find the minimum value of x .
- 從 6 對不同型號的鞋子中任取 3 只，求 3 只鞋子中恰有 2 只是同一型號的概率。
3 shoes are chosen randomly from 6 pairs of shoes with different models, find the probability that exactly two out of the three shoes are of the same model.

*** 試卷完 End of Paper ***